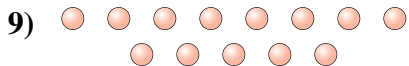
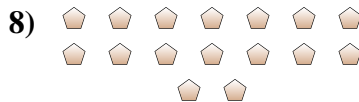
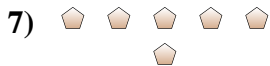
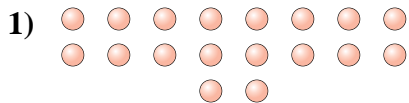




Determine if the number of shapes is even or odd.



Answers

1. _____

2. _____

3. _____

4. _____

5. _____

6. _____

7. _____

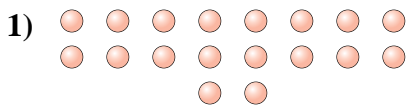
8. _____

9. _____

10. _____



Determine if the number of shapes is even or odd.



18



15



13



10



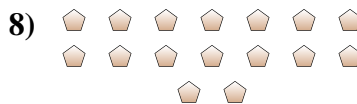
14



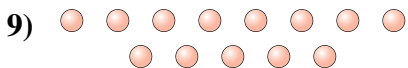
14



6



16



13



10

Answers

1. Even

2. Odd

3. Odd

4. Even

5. Even

6. Even

7. Even

8. Even

9. Odd

10. Even